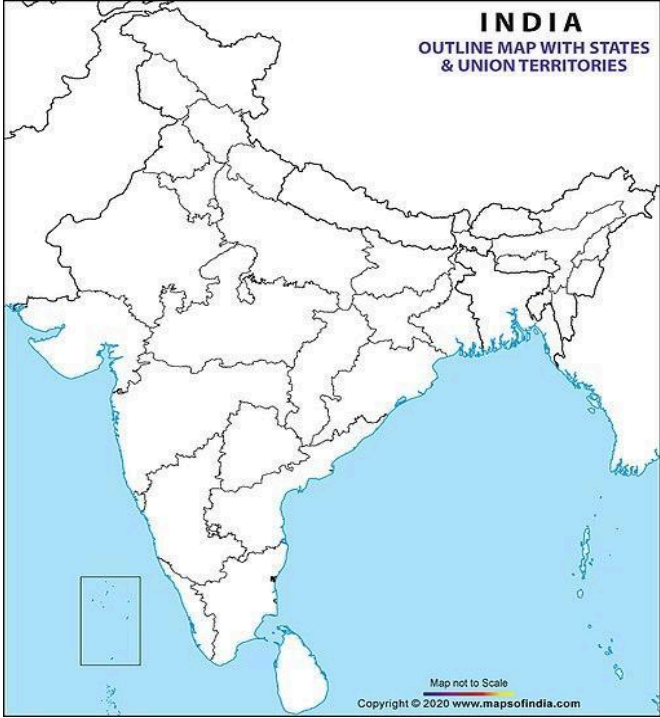
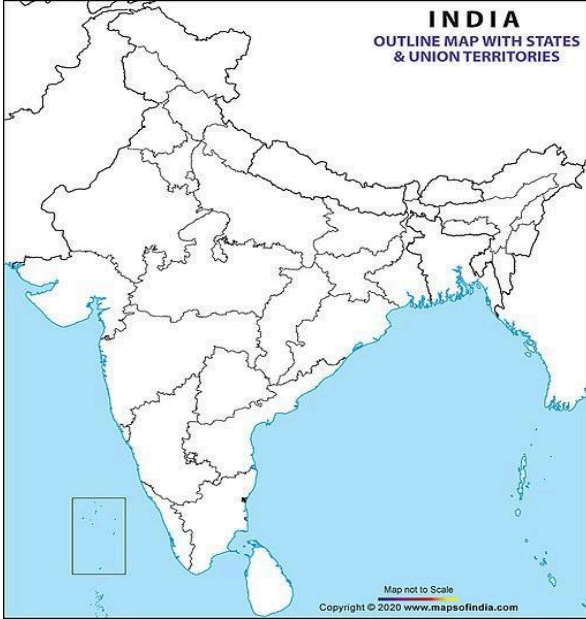
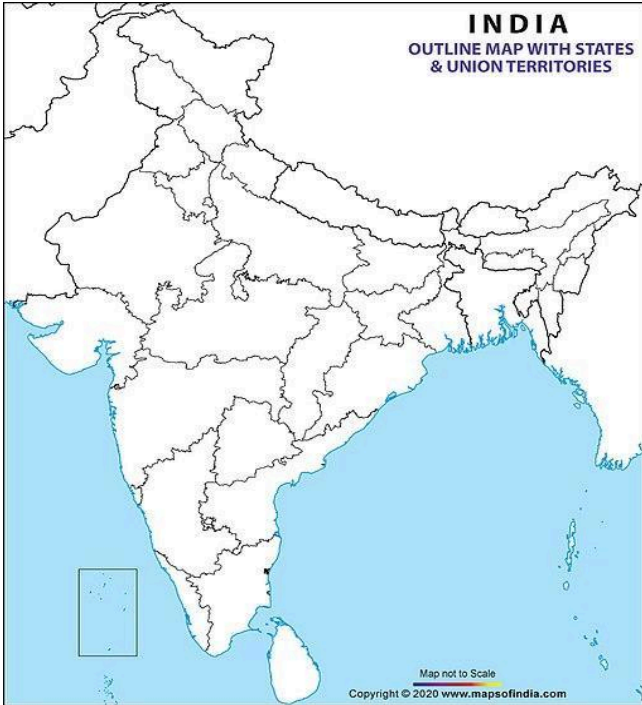


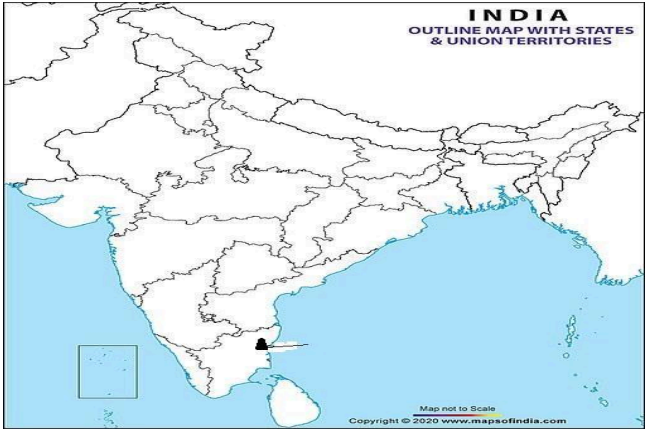
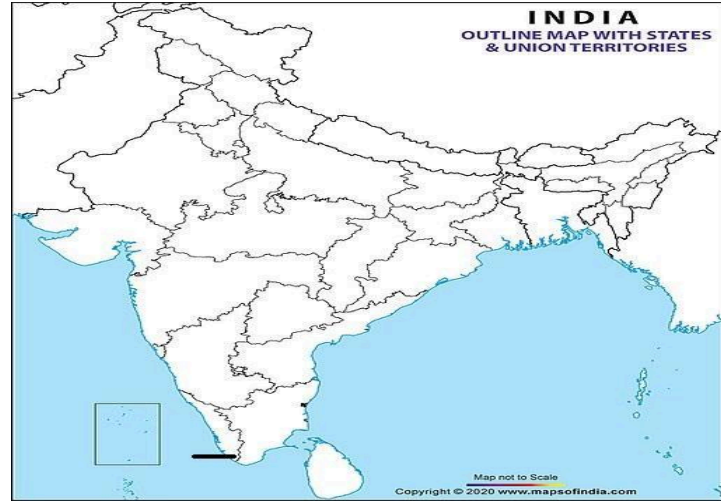
**CLASS – XII**

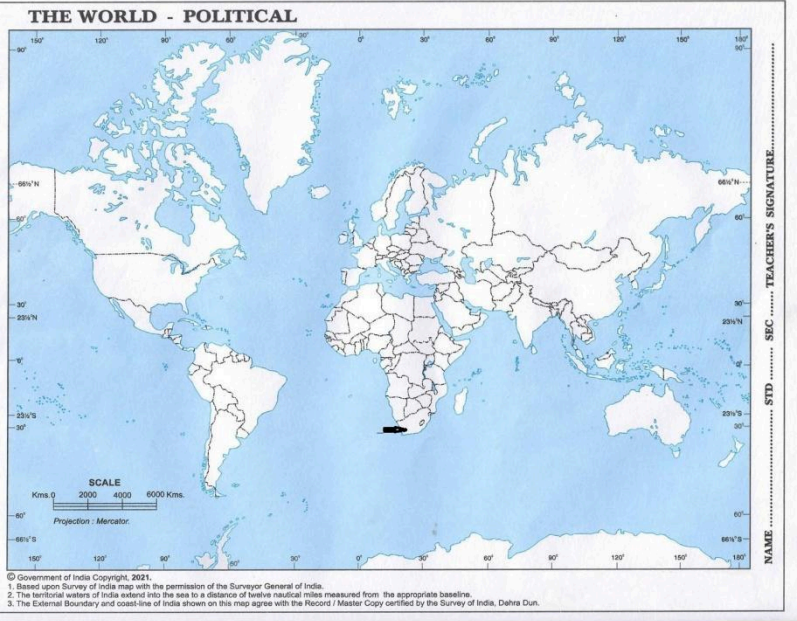
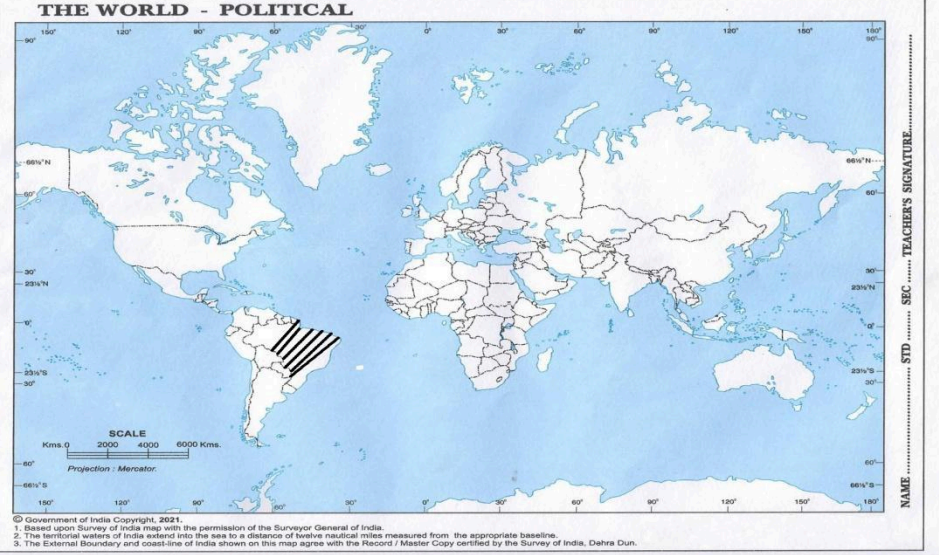
**SUBJECT :GEOGRAPHY(MAPS FULL SYLLABUS)**

**MONTH :JANUARY**

QUE S NO	TYPE OF QUESTION ( REASONIN G / MCQ / MATRIX / GRID / OTHER )	QUESTION	OPTION PROVIDED	CORREC T OPTION	EXPLANATION	% OF STUDENTS ATTEMPT ED CORRECTL Y
01	MCQ(MAP )	 <p>Find the state with highest population density.</p>	1. Kerala 2. West Bengal 3. Bihar 4. Uttar Pradesh	3	BIHAR	

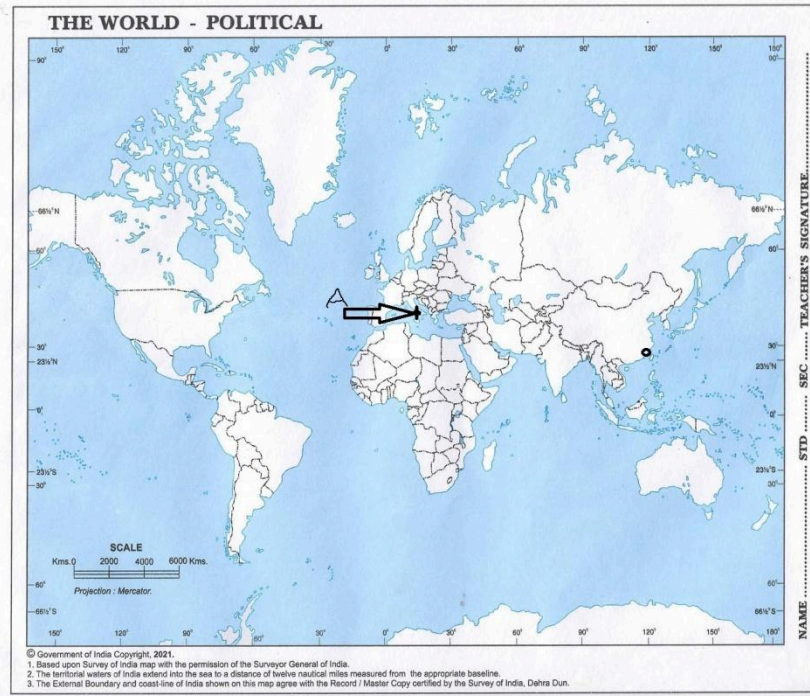
02	MCQ(MAP )	 <p>Name the state leading in the production of jute.</p>	<ol style="list-style-type: none"> <li>1. Andhra Pradesh</li> <li>2. West Bengal</li> <li>3. Jharkhand</li> <li>4. Bihar</li> </ol>	2	West Bengal	
03	MCQ(MAP )		<ol style="list-style-type: none"> <li>1. Gujarat</li> <li>2. Rajasthan</li> <li>3. Madhya Pradesh</li> <li>4. Maharashtra</li> </ol>	4	Maharashtra	

		In which state are Ratnagiri iron ore mines located?			
04	MCQ(MAP )	 <p>AN IMPORTANT COAL MINE IN TAMIL NADU.</p>	1.Talchar 2.Raniganj 3.Neyvely 4.Singrauli	3	Neyvely
05	MCQ(MAP )	 <p>Name the international air port in Kerala.</p>	1. Kochi 2..Thiruvananthapuram 3.Calicut 4.None of these	2	Thiruvananthapuram.

06	MCQ(MAP )	 <p>THE WORLD - POLITICAL</p> <p>© Government of India Copyright, 2021.  1. Based upon Survey of India map with the permission of the Surveyor General of India.  2. The territorial waters of India extend into the sea to a distance of twelve nautical miles measured from the appropriate baseline.  3. The External Boundary and coast-line of India shown on this map agree with the Record / Master Copy certified by the Survey of India, Dehra Dun.</p>	<p>1.Cape Town  2.Mombasa  3. Durban  4. Suez</p>	1	Cape Town			
Name a major sea port situated at the southernmost tip of Africa.		07	MCQ(MAP )	 <p>THE WORLD - POLITICAL</p> <p>© Government of India Copyright, 2021.  1. Based upon Survey of India map with the permission of the Surveyor General of India.  2. The territorial waters of India extend into the sea to a distance of twelve nautical miles measured from the appropriate baseline.  3. The External Boundary and coast-line of India shown on this map agree with the Record / Master Copy certified by the Survey of India, Dehra Dun.</p>	<p>1.Nomadic herding  2. Subsistence gathering  3.Commercial grain agriculture  4. Important seaport</p>	2	Subsistence gathering	
Identify the shading area showing in South America in given map.								

08

MCQ(MAP  
)



INTERNATIONAL AIR PORT OF ITALY INDICATE AS "A".

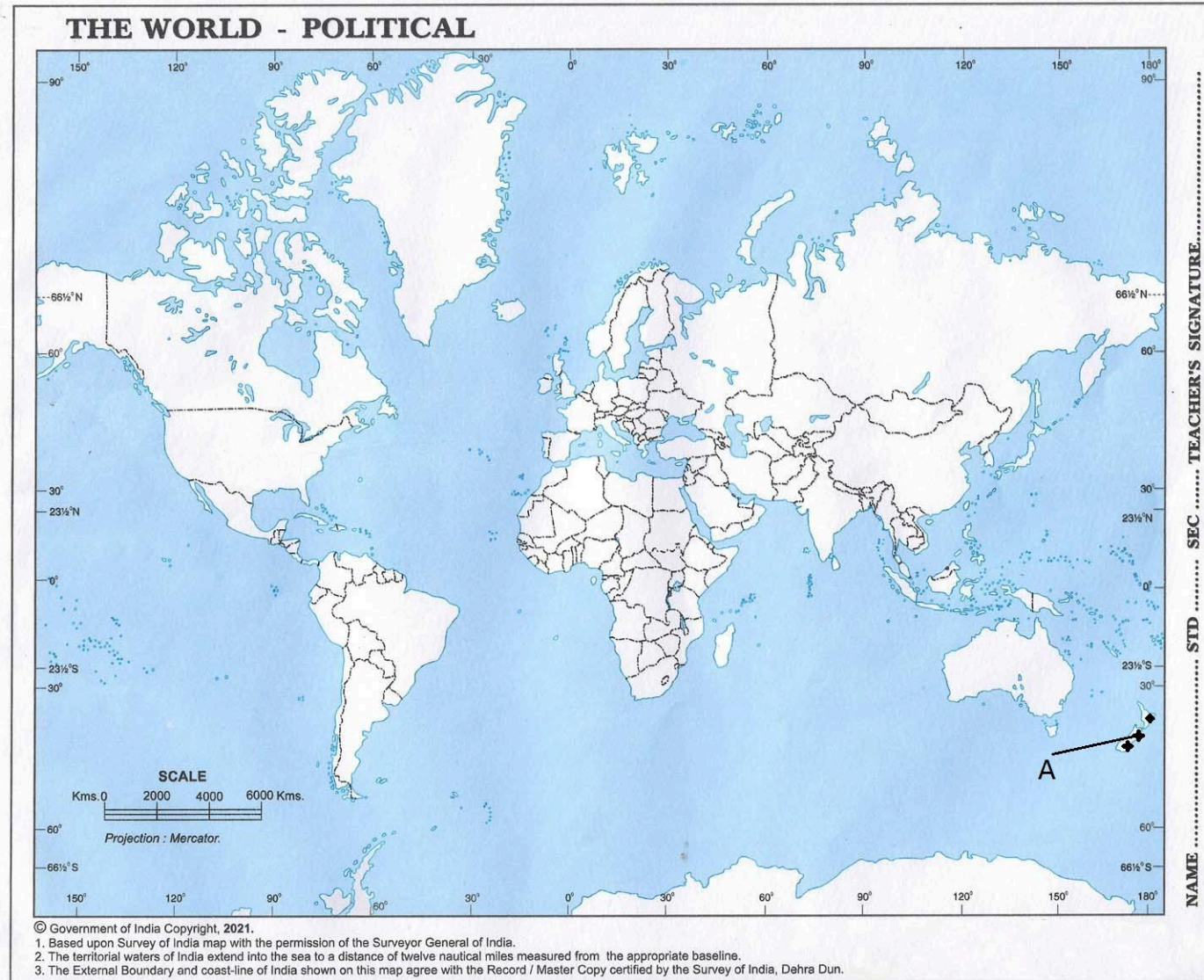
1. Genoa
- 2.FLORENCE
- 3.MILAN
- 4.ROME

4

ROME

09

MCQ(MAP )



1. INDONESIA
2. FRANCE
3. NEWZELAND
4. GERMANY

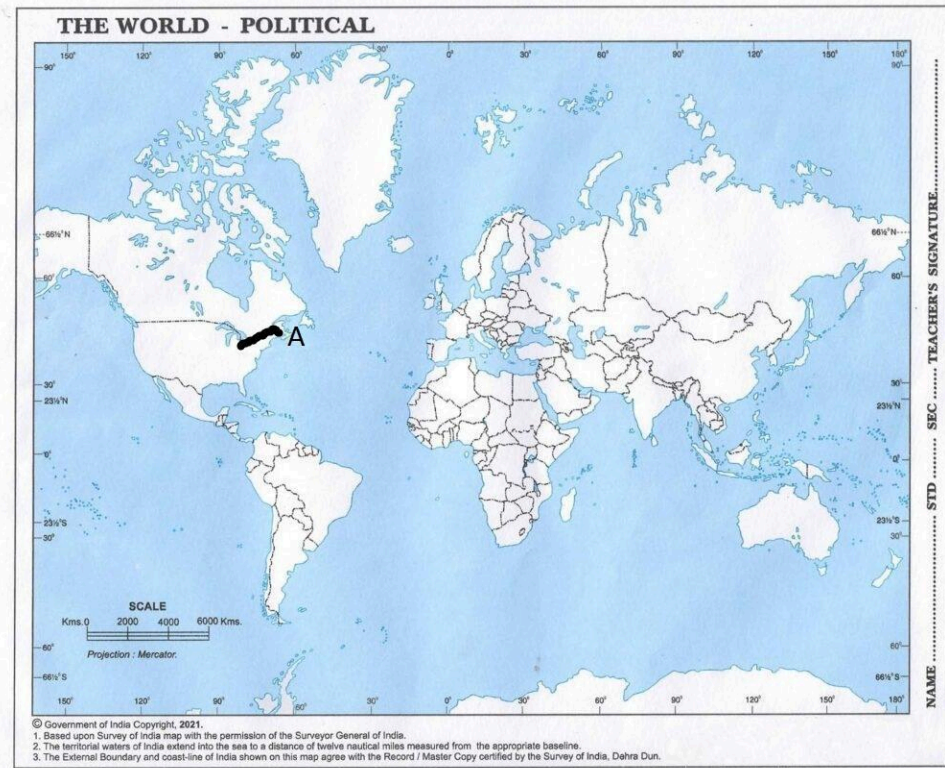
3

NEWZELAND

IDENTIFY THE COUNTRY MARKED AS 'A' THAT PRACTICE EXTENSIVE COMMERCIAL GRAIN AGRICULTURE.

10

MCQ(MAP )



AS "A" CONNECT NORTH AMERICA TO THE ATLANTIC OCEAN.

IDENTIFY THE AREA MARKED

1. Great Lakes
2. Yellowstone River
3. Mississippi River
4. Gaube lake

1

Great Lakes